

- (b) Find $C'(200)$ and explain its meaning. What does it predict?
- (c) Compare $C'(200)$ with the cost of manufacturing the 201st meter of fabric.
28. The cost function for production of a commodity is

$$C(x) = 339 + 25x - 0.09x^2 + 0.0004x^3$$

- (a) Find and interpret $C'(100)$.
- (b) Compare $C'(100)$ with the cost of producing the 101st item.
29. If $p(x)$ is the total value of the production when there are x workers in a plant, then the *average productivity* of the workforce at the plant is

$$A(x) = \frac{p(x)}{x}$$

- (a) Find $A'(x)$. Why does the company want to hire more workers if $A'(x) > 0$?
- (b) Show that $A'(x) > 0$ if $p'(x)$ is greater than the average productivity.
30. If R denotes the reaction of the body to some stimulus of strength x , the *sensitivity* S is defined to be the rate of change of the reaction with respect to x . A particular example is that when the brightness x of a light source is increased, the eye reacts by decreasing the area R of the pupil. The experimental formula

$$R = \frac{40 + 24x^{0.4}}{1 + 4x^{0.4}}$$

has been used to model the dependence of R on x when R is measured in square millimeters and x is measured in appropriate units of brightness.

- (a) Find the sensitivity.
- (b) Illustrate part (a) by graphing both R and S as functions of x . Comment on the values of R and S at low levels of brightness. Is this what you would expect?
31. The gas law for an ideal gas at absolute temperature T (in kelvins), pressure P (in atmospheres), and volume V (in

liters) is $PV = nRT$, where n is the number of moles of the gas and $R = 0.0821$ is the gas constant. Suppose that, at a certain instant, $P = 8.0$ atm and is increasing at a rate of 0.10 atm/min and $V = 10$ L and is decreasing at a rate of 0.15 L/min. Find the rate of change of T with respect to time at that instant if $n = 10$ mol.

32. In a fish farm, a population of fish is introduced into a pond and harvested regularly. A model for the rate of change of the fish population is given by the equation

$$\frac{dP}{dt} = r_0 \left(1 - \frac{P(t)}{P_c} \right) P(t) - \beta P(t)$$

where r_0 is the birth rate of the fish, P_c is the maximum population that the pond can sustain (called the *carrying capacity*), and β is the percentage of the population that is harvested.

- (a) What value of dP/dt corresponds to a stable population?
- (b) If the pond can sustain 10,000 fish, the birth rate is 5%, and the harvesting rate is 4%, find the stable population level.
- (c) What happens if β is raised to 5%?
33. In the study of ecosystems, *predator-prey models* are often used to study the interaction between species. Consider populations of tundra wolves, given by $W(t)$, and caribou, given by $C(t)$, in northern Canada. The interaction has been modeled by the equations

$$\frac{dC}{dt} = aC - bCW \quad \frac{dW}{dt} = -cW + dCW$$

- (a) What values of dC/dt and dW/dt correspond to stable populations?
- (b) How would the statement "The caribou go extinct" be represented mathematically?
- (c) Suppose that $a = 0.05$, $b = 0.001$, $c = 0.05$, and $d = 0.0001$. Find all population pairs (C, W) that lead to stable populations. According to this model, is it possible for the two species to live in balance or will one or both species become extinct?

3.8 RELATED RATES

If we are pumping air into a balloon, both the volume and the radius of the balloon are increasing and their rates of increase are related to each other. But it is much easier to measure directly the rate of increase of the volume than the rate of increase of the radius.

In a related rates problem the idea is to compute the rate of change of one quantity in terms of the rate of change of another quantity (which may be more easily measured). The procedure is to find an equation that relates the two quantities and then use the Chain Rule to differentiate both sides with respect to time.

EXAMPLE 1 Air is being pumped into a spherical balloon so that its volume increases at a rate of $100 \text{ cm}^3/\text{s}$. How fast is the radius of the balloon increasing when the diameter is 50 cm ?

■ According to the Principles of Problem Solving discussed on page 54, the first step is to understand the problem. This includes reading the problem carefully, identifying the given and the unknown, and introducing suitable notation.

SOLUTION We start by identifying two things:

the *given information*:

the rate of increase of the volume of air is $100 \text{ cm}^3/\text{s}$

and the *unknown*:

the rate of increase of the radius when the diameter is 50 cm

In order to express these quantities mathematically, we introduce some suggestive notation:

Let V be the volume of the balloon and let r be its radius.

The key thing to remember is that rates of change are derivatives. In this problem, the volume and the radius are both functions of the time t . The rate of increase of the volume with respect to time is the derivative dV/dt , and the rate of increase of the radius is dr/dt . We can therefore restate the given and the unknown as follows:

$$\text{Given: } \frac{dV}{dt} = 100 \text{ cm}^3/\text{s}$$

$$\text{Unknown: } \frac{dr}{dt} \text{ when } r = 25 \text{ cm}$$

■ The second stage of problem solving is to think of a plan for connecting the given and the unknown.

In order to connect dV/dt and dr/dt , we first relate V and r by the formula for the volume of a sphere:

$$V = \frac{4}{3} \pi r^3$$

In order to use the given information, we differentiate each side of this equation with respect to t . To differentiate the right side, we need to use the Chain Rule:

$$\frac{dV}{dt} = \frac{dV}{dr} \frac{dr}{dt} = 4\pi r^2 \frac{dr}{dt}$$

Now we solve for the unknown quantity:

$$\frac{dr}{dt} = \frac{1}{4\pi r^2} \frac{dV}{dt}$$

If we put $r = 25$ and $dV/dt = 100$ in this equation, we obtain

$$\frac{dr}{dt} = \frac{1}{4\pi(25)^2} 100 = \frac{1}{25\pi}$$

The radius of the balloon is increasing at the rate of $1/(25\pi) \approx 0.0127 \text{ cm/s}$. □

■ Notice that, although dV/dt is constant, dr/dt is not constant.

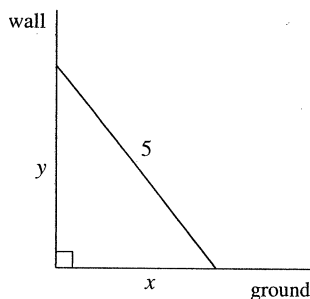


FIGURE 1

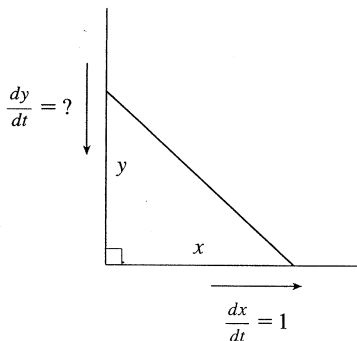


FIGURE 2

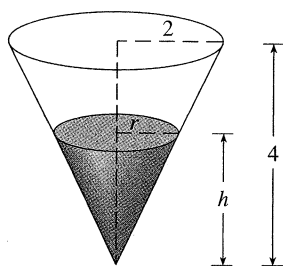


FIGURE 3

EXAMPLE 2 A ladder 5 m long rests against a vertical wall. If the bottom of the ladder slides away from the wall at a rate of 1 m/s, how fast is the top of the ladder sliding down the wall when the bottom of the ladder is 3 m from the wall?

SOLUTION We first draw a diagram and label it as in Figure 1. Let x meters be the distance from the bottom of the ladder to the wall and y meters the distance from the top of the ladder to the ground. Note that x and y are both functions of t (time, measured in seconds).

We are given that $dx/dt = 1$ m/s and we are asked to find dy/dt when $x = 3$ m (see Figure 2). In this problem, the relationship between x and y is given by the Pythagorean Theorem:

$$x^2 + y^2 = 25$$

Differentiating each side with respect to t using the Chain Rule, we have

$$2x \frac{dx}{dt} + 2y \frac{dy}{dt} = 0$$

and solving this equation for the desired rate, we obtain

$$\frac{dy}{dt} = -\frac{x}{y} \frac{dx}{dt}$$

When $x = 3$, the Pythagorean Theorem gives $y = 4$ and so, substituting these values and $dx/dt = 1$, we have

$$\frac{dy}{dt} = -\frac{3}{4}(1) = -\frac{3}{4} \text{ m/s}$$

The fact that dy/dt is negative means that the distance from the top of the ladder to the ground is *decreasing* at a rate of $\frac{3}{4}$ m/s. In other words, the top of the ladder is sliding down the wall at a rate of $\frac{3}{4}$ m/s. \square

EXAMPLE 3 A water tank has the shape of an inverted circular cone with base radius 2 m and height 4 m. If water is being pumped into the tank at a rate of 2 m³/min, find the rate at which the water level is rising when the water is 3 m deep.

SOLUTION We first sketch the cone and label it as in Figure 3. Let V , r , and h be the volume of the water, the radius of the surface, and the height of the water at time t , where t is measured in minutes.

We are given that $dV/dt = 2$ m³/min and we are asked to find dh/dt when h is 3 m. The quantities V and h are related by the equation

$$V = \frac{1}{3}\pi r^2 h$$

but it is very useful to express V as a function of h alone. In order to eliminate r , we use the similar triangles in Figure 3 to write

$$\frac{r}{h} = \frac{2}{4} \quad r = \frac{h}{2}$$

and the expression for V becomes

$$V = \frac{1}{3}\pi \left(\frac{h}{2}\right)^2 h = \frac{\pi}{12} h^3$$

Now we can differentiate each side with respect to t :

$$\frac{dV}{dt} = \frac{\pi}{4} h^2 \frac{dh}{dt}$$

so

$$\frac{dh}{dt} = \frac{4}{\pi h^2} \frac{dV}{dt}$$

Substituting $h = 3$ m and $dV/dt = 2$ m³/min, we have

$$\frac{dh}{dt} = \frac{4}{\pi(3)^2} \cdot 2 = \frac{8}{9\pi}$$

The water level is rising at a rate of $8/(9\pi) \approx 0.28$ m/min. □

■ Look back: What have we learned from Examples 1–3 that will help us solve future problems?

⚠ WARNING A common error is to substitute the given numerical information (for quantities that vary with time) too early. This should be done only *after* the differentiation. (Step 7 follows Step 6.) For instance, in Example 3 we dealt with general values of h until we finally substituted $h = 3$ at the last stage. (If we had put $h = 3$ earlier, we would have gotten $dV/dt = 0$, which is clearly wrong.)

STRATEGY It is useful to recall some of the problem-solving principles from page 54 and adapt them to related rates in light of our experience in Examples 1–3:

1. Read the problem carefully.
2. Draw a diagram if possible.
3. Introduce notation. Assign symbols to all quantities that are functions of time.
4. Express the given information and the required rate in terms of derivatives.
5. Write an equation that relates the various quantities of the problem. If necessary, use the geometry of the situation to eliminate one of the variables by substitution (as in Example 3).
6. Use the Chain Rule to differentiate both sides of the equation with respect to t .
7. Substitute the given information into the resulting equation and solve for the unknown rate.

The following examples are further illustrations of the strategy.

EXAMPLE 4 Car A is traveling west at 90 km/h and car B is traveling north at 100 km/h. Both are headed for the intersection of the two roads. At what rate are the cars approaching each other when car A is 60 m and car B is 80 m from the intersection?

SOLUTION We draw Figure 4, where C is the intersection of the roads. At a given time t , let x be the distance from car A to C , let y be the distance from car B to C , and let z be the distance between the cars, where x , y , and z are measured in kilometers.

We are given that $dx/dt = -90$ km/h and $dy/dt = -100$ km/h. (The derivatives are negative because x and y are decreasing.) We are asked to find dz/dt . The equation that relates x , y , and z is given by the Pythagorean Theorem:

$$z^2 = x^2 + y^2$$

Differentiating each side with respect to t , we have

$$2z \frac{dz}{dt} = 2x \frac{dx}{dt} + 2y \frac{dy}{dt}$$

$$\frac{dz}{dt} = \frac{1}{z} \left(x \frac{dx}{dt} + y \frac{dy}{dt} \right)$$

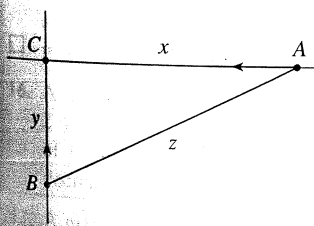


FIGURE 4

When $x = 0.06$ km and $y = 0.08$ km, the Pythagorean Theorem gives $z = 0.1$ km, so

$$\frac{dz}{dt} = \frac{1}{0.1} [0.06(-90) + 0.08(-100)] = -134$$

The cars are approaching each other at a rate of 134 km/h. □

EXAMPLE 5 A man walks along a straight path at a speed of 1.5 m/s. A searchlight is located on the ground 6 m from the path and is kept focused on the man. At what rate is the searchlight rotating when the man is 8 m from the point on the path closest to the searchlight?

SOLUTION We draw Figure 5 and let x be the distance from the man to the point on the path closest to the searchlight. We let θ be the angle between the beam of the searchlight and the perpendicular to the path.

We are given that $dx/dt = 1.5$ m/s and are asked to find $d\theta/dt$ when $x = 8$. The equation that relates x and θ can be written from Figure 5:

$$\frac{x}{6} = \tan \theta \quad x = 6 \tan \theta$$

Differentiating each side with respect to t , we get

$$\frac{dx}{dt} = 6 \sec^2 \theta \frac{d\theta}{dt}$$

so
$$\frac{d\theta}{dt} = \frac{1}{6} \cos^2 \theta \frac{dx}{dt} = \frac{1}{6} \cos^2 \theta (1.5) = \frac{1}{4} \cos^2 \theta$$

When $x = 8$, the length of the beam is 10, so $\cos \theta = \frac{4}{5}$ and

$$\frac{d\theta}{dt} = \frac{1}{4} \left(\frac{4}{5}\right)^2 = \frac{4}{25} = 0.16$$

The searchlight is rotating at a rate of 0.16 rad/s. □

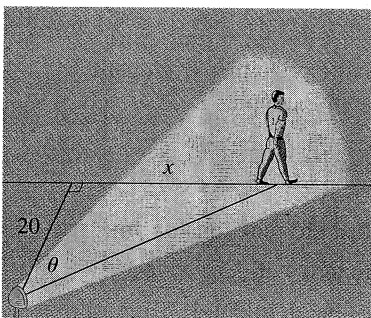


FIGURE 5

3.8 EXERCISES

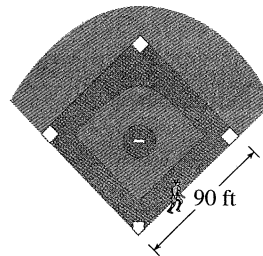
- If V is the volume of a cube with edge length x and the cube expands as time passes, find dV/dt in terms of dx/dt .
- (a) If A is the area of a circle with radius r and the circle expands as time passes, find dA/dt in terms of dr/dt .
(b) Suppose oil spills from a ruptured tanker and spreads in a circular pattern. If the radius of the oil spill increases at a constant rate of 1 m/s, how fast is the area of the spill increasing when the radius is 30 m?
- Each side of a square is increasing at a rate of 6 cm/s. At what rate is the area of the square increasing when the area of the square is 16 cm²?
- The length of a rectangle is increasing at a rate of 8 cm/s and its width is increasing at a rate of 3 cm/s. When the length is 20 cm and the width is 10 cm, how fast is the area of the rectangle increasing?

5. A cylindrical tank with radius 5 m is being filled with water at a rate of $3 \text{ m}^3/\text{min}$. How fast is the height of the water increasing?
6. The radius of a sphere is increasing at a rate of 4 mm/s . How fast is the volume increasing when the diameter is 80 mm ?
7. If $y = x^3 + 2x$ and $dx/dt = 5$, find dy/dt when $x = 2$.
8. If $x^2 + y^2 = 25$ and $dy/dt = 6$, find dx/dt when $y = 4$.
9. If $z^2 = x^2 + y^2$, $dx/dt = 2$, and $dy/dt = 3$, find dz/dt when $x = 5$ and $y = 12$.
10. A particle moves along the curve $y = \sqrt{1 + x^3}$. As it reaches the point $(2, 3)$, the y -coordinate is increasing at a rate of 4 cm/s . How fast is the x -coordinate of the point changing at that instant?


11–14

- (a) What quantities are given in the problem?
 - (b) What is the unknown?
 - (c) Draw a picture of the situation for any time t .
 - (d) Write an equation that relates the quantities.
 - (e) Finish solving the problem.
11. A plane flying horizontally at an altitude of 2 km and a speed of 800 km/h passes directly over a radar station. Find the rate at which the distance from the plane to the station is increasing when it is 3 km away from the station.
 12. If a snowball melts so that its surface area decreases at a rate of $1 \text{ cm}^2/\text{min}$, find the rate at which the diameter decreases when the diameter is 10 cm .
 13. A street light is mounted at the top of a 5-meter-tall pole. A man 2 m tall walks away from the pole with a speed of 1.5 m/s along a straight path. How fast is the tip of his shadow moving when he is 10 m from the pole?
 14. At noon, ship A is 150 km west of ship B. Ship A is sailing east at 35 km/h and ship B is sailing north at 25 km/h . How fast is the distance between the ships changing at $4:00 \text{ PM}$?
-
15. Two cars start moving from the same point. One travels south at 30 km/h and the other travels west at 72 km/h . At what rate is the distance between the cars increasing two hours later?
 16. A spotlight on the ground shines on a wall 12 m away. If a man 2 m tall walks from the spotlight toward the building at a speed of 1.6 m/s , how fast is the length of his shadow on the building decreasing when he is 4 m from the building?
 17. A man starts walking north at 1.2 m/s from a point P . Five minutes later a woman starts walking south at 1.6 m/s from a point 200 m due east of P . At what rate are the people moving apart 15 min after the woman starts walking?
 18. A baseball diamond is a square with side 90 ft . A batter hits the ball and runs toward first base with a speed of 24 ft/s .
 - (a) At what rate is his distance from second base decreasing when he is halfway to first base?

- (b) At what rate is his distance from third base increasing at the same moment?

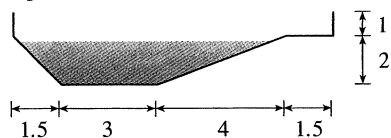


19. The altitude of a triangle is increasing at a rate of 1 cm/min while the area of the triangle is increasing at a rate of $2 \text{ cm}^2/\text{min}$. At what rate is the base of the triangle changing when the altitude is 10 cm and the area is 100 cm^2 ?
20. A boat is pulled into a dock by a rope attached to the bow of the boat and passing through a pulley on the dock that is 1 m higher than the bow of the boat. If the rope is pulled in at a rate of 1 m/s , how fast is the boat approaching the dock when it is 8 m from the dock?

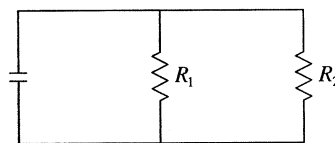


21. At noon, ship A is 100 km west of ship B. Ship A is sailing south at 35 km/h and ship B is sailing north at 25 km/h . How fast is the distance between the ships changing at $4:00 \text{ PM}$?
22. A particle is moving along the curve $y = \sqrt{x}$. As the particle passes through the point $(4, 2)$, its x -coordinate increases at a rate of 3 cm/s . How fast is the distance from the particle to the origin changing at this instant?
23. Water is leaking out of an inverted conical tank at a rate of $10,000 \text{ cm}^3/\text{min}$ at the same time that water is being pumped into the tank at a constant rate. The tank has height 6 m and the diameter at the top is 4 m . If the water level is rising at a rate of 20 cm/min when the height of the water is 2 m , find the rate at which water is being pumped into the tank.
24. A trough is 6 m long and its ends have the shape of isosceles triangles that are 1 m across at the top and have a height of 50 cm . If the trough is being filled with water at a rate of $1.2 \text{ m}^3/\text{min}$, how fast is the water level rising when the water is 30 cm deep?
25. A water trough is 10 m long and a cross-section has the shape of an isosceles trapezoid that is 30 cm wide at the bottom, 80 cm wide at the top, and has height 50 cm . If the trough is being filled with water at the rate of $0.2 \text{ m}^3/\text{min}$, how fast is the water level rising when the water is 30 cm deep?
26. A swimming pool is 5 m wide, 10 m long, 1 m deep at the shallow end, and 3 m deep at its deepest point. A cross-section

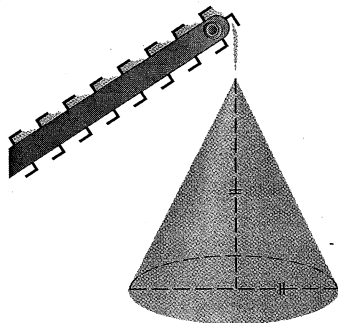
is shown in the figure. If the pool is being filled at a rate of $0.1 \text{ m}^3/\text{min}$, how fast is the water level rising when the depth at the deepest point is 1 m ?



If R_1 and R_2 are increasing at rates of $0.3 \Omega/\text{s}$ and $0.2 \Omega/\text{s}$, respectively, how fast is R changing when $R_1 = 80 \Omega$ and $R_2 = 100 \Omega$?



27. Gravel is being dumped from a conveyor belt at a rate of $3 \text{ m}^3/\text{min}$, and its coarseness is such that it forms a pile in the shape of a cone whose base diameter and height are always equal. How fast is the height of the pile increasing when the pile is 3 m high?

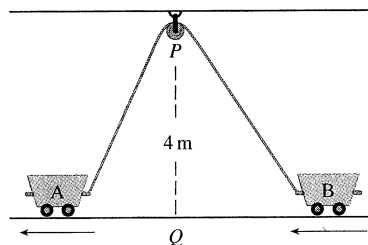


28. A kite 50 m above the ground moves horizontally at a speed of 2 m/s . At what rate is the angle between the string and the horizontal decreasing when 100 m of string has been let out?
29. Two sides of a triangle are 4 m and 5 m in length and the angle between them is increasing at a rate of 0.06 rad/s . Find the rate at which the area of the triangle is increasing when the angle between the sides of fixed length is $\pi/3$.
30. How fast is the angle between the ladder and the ground changing in Example 2 when the bottom of the ladder is 3 m from the wall?

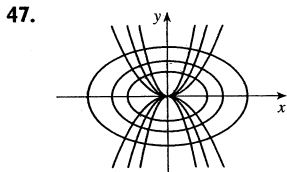
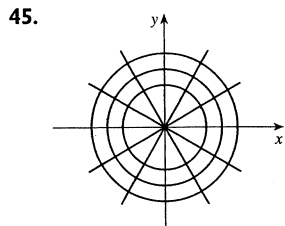
31. Boyle's Law states that when a sample of gas is compressed at a constant temperature, the pressure P and volume V satisfy the equation $PV = C$, where C is a constant. Suppose that at a certain instant the volume is 600 cm^3 , the pressure is 150 kPa , and the pressure is increasing at a rate of 20 kPa/min . At what rate is the volume decreasing at this instant?
32. When air expands adiabatically (without gaining or losing heat), its pressure P and volume V are related by the equation $PV^{1.4} = C$, where C is a constant. Suppose that at a certain instant the volume is 400 cm^3 and the pressure is 80 kPa and is decreasing at a rate of 10 kPa/min . At what rate is the volume increasing at this instant?
33. If two resistors with resistances R_1 and R_2 are connected in parallel, as in the figure, then the total resistance R , measured in ohms (Ω), is given by

$$\frac{1}{R} = \frac{1}{R_1} + \frac{1}{R_2}$$

34. Brain weight B as a function of body weight W in fish has been modeled by the power function $B = 0.007W^{2/3}$, where B and W are measured in grams. A model for body weight as a function of body length L (measured in centimeters) is $W = 0.12L^{2.53}$. If, over 10 million years, the average length of a certain species of fish evolved from 15 cm to 20 cm at a constant rate, how fast was this species' brain growing when the average length was 18 cm ?
35. Two sides of a triangle have lengths 12 m and 15 m . The angle between them is increasing at a rate of $2^\circ/\text{min}$. How fast is the length of the third side increasing when the angle between the sides of fixed length is 60° ?
36. Two carts, A and B, are connected by a rope 12 m long that passes over a pulley P (see the figure). The point Q is on the floor 4 m directly beneath P and between the carts. Cart A is being pulled away from Q at a speed of 0.5 m/s . How fast is cart B moving toward Q at the instant when cart A is 3 m from Q ?



37. A television camera is positioned 1200 m from the base of a rocket launching pad. The angle of elevation of the camera has to change at the correct rate in order to keep the rocket in sight. Also, the mechanism for focusing the camera has to take into account the increasing distance from the camera to the rising rocket. Let's assume the rocket rises vertically and its speed is 200 m/s when it has risen 900 m .
- (a) How fast is the distance from the television camera to the rocket changing at that moment?
- (b) If the television camera is always kept aimed at the rocket, how fast is the camera's angle of elevation changing at that same moment?
38. A lighthouse is located on a small island 3 km away from the nearest point P on a straight shoreline and its light makes four revolutions per minute. How fast is the beam of light moving along the shoreline when it is 1 km from P ?

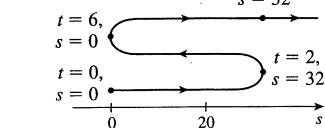


49. $(\pm\sqrt{3}, 0)$ 51. $(-1, -1), (1, 1)$ 53. 2

EXERCISES 3.7 ■ PAGE 179

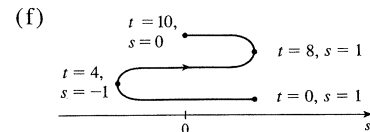
1. (a) $3t^2 - 24t + 36$ (b) -9 m/s (c) $t = 2, 6$
 (d) $0 \leq t < 2, t > 6$
 (e) 96 m
 (f)

(g) $6t - 24; -6$ m/s²



- (i) Speeding up when $2 < t < 4$ or $t > 6$;
 slowing down when $0 \leq t < 2$ or $4 < t < 6$

3. (a) $-\frac{\pi}{4} \sin\left(\frac{\pi t}{4}\right)$ (b) $-\frac{1}{8}\pi\sqrt{2}$ m/s (c) $t = 0, 4, 8$
 (d) $4 < t < 8$ (e) 4 m



- (g) $-\frac{1}{16}\pi^2 \cos(\pi t/4); \frac{1}{32}\pi^2\sqrt{2}$ m/s²
 (h)

- (i) Speeding up when $0 < t < 2, 4 < t < 6, 8 < t < 10$;
 slowing down when $2 < t < 4, 6 < t < 8$
 5. (a) Speeding up when $0 < t < 1$ or $2 < t < 3$;
 slowing down when $1 < t < 2$
 (b) Speeding up when $1 < t < 2$ or $3 < t < 4$;
 slowing down when $0 < t < 1$ or $2 < t < 3$
 7. (a) $t = 4$ s
 (b) $t = 1.5$ s; the velocity has an absolute minimum.
 9. (a) 5.02 m/s (b) $\sqrt{17}$ m/s

11. (a) 30 mm²/mm; the rate at which the area is increasing with respect to side length as x reaches 15 mm
 (b) $\Delta A \approx 2x \Delta x$
 13. (a) (i) 5π (ii) 4.5π (iii) 4.1π
 (b) 4π (c) $\Delta A \approx 2\pi r \Delta r$
 15. (a) 8π ft²/ft (b) 16π ft²/ft (c) 24π ft²/ft
 The rate increases as the radius increases.
 17. (a) 6 kg/m (b) 12 kg/m (c) 18 kg/m
 At the right end; at the left end
 19. (a) 4.75 A (b) 5 A; $t = \frac{2}{3}$ s
 21. (a) $dV/dP = -C/P^2$ (b) At the beginning
 23. (a) 16 million/year; 78.5 million/year
 (b) $P(t) = at^3 + bt^2 + ct + d$, where $a \approx 0.00129371$,
 $b \approx -7.061422$, $c \approx 12,822.979$, $d \approx -7,743,770$
 (c) $P'(t) = 3at^2 + 2bt + c$
 (d) 14.48 million/year; 75.29 million/year (smaller)
 (e) 81.62 million/year
 25. (a) 0.926 cm/s; 0.694 cm/s; 0
 (b) 0; -92.6 (cm/s)/cm; -185.2 (cm/s)/cm
 (c) At the center; at the edge
 27. (a) $C'(x) = 12 - 0.2x + 0.0015x^2$
 (b) \$32/meter; the cost of producing the 201st meter
 (c) \$32.20
 29. (a) $[xp'(x) - p(x)]/x^2$; the average productivity increases as new workers are added.
 31. -0.2436 K/min
 33. (a) 0 and 0 (b) $C = 0$
 (c) (0, 0), (500, 50); it is possible for the species to coexist.

EXERCISES 3.8 ■ PAGE 186

1. $dV/dt = 3x^2 dx/dt$ 3. 48 cm²/s 5. $3/(25\pi)$ m/min
 7. 70 9. $\pm \frac{46}{13}$
 11. (a) The plane's altitude is 2 km and its speed is 800 km/h.
 (b) The rate at which the distance from the plane to the station is increasing when the plane is 3 km from the station
 (c) (d) $y^2 = x^2 + 4$
 (e) $\frac{800}{3}\sqrt{5}$ km/h

13. (a) The height of the pole (6 m), the height of the man (2 m), and the speed of the man (1.5 m/s)
 (b) The rate at which the tip of the man's shadow is moving when he is 10 m from the pole
 (c) (d) $\frac{6}{2} = \frac{x+y}{y}$ (e) $\frac{9}{4}$ m/s

15. 78 km/h 17. $8064/\sqrt{8334400} \approx 2.79$ m/s
 19. -1.6 cm/min 21. $\frac{720}{13} \approx 55.4$ km/h
 23. $(10,000 + 800,000\pi/9) \approx 2.89 \times 10^5$ cm³/min
 25. $\frac{10}{3}$ cm/min 27. $4/(3\pi) \approx 0.42$ m/min 29. 0.3 m/s²
 31. 80 cm³/min 33. $\frac{107}{810} \approx 0.132$ Ω /s 35. 0.396 m/min
 37. (a) 120 m/s (b) ≈ 0.107 rad/s 39. $\frac{10}{9}\pi$ km/min