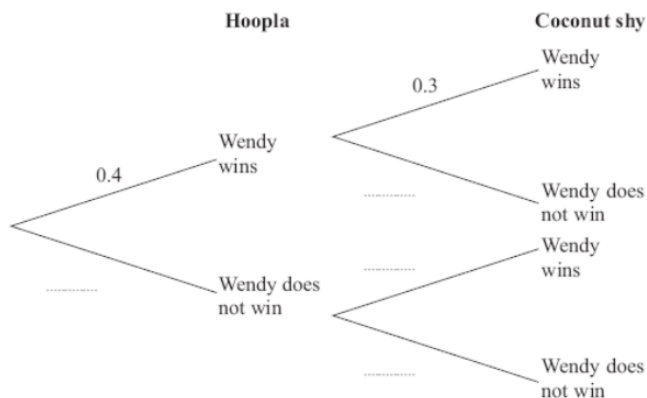


BIG PICTURE of this UNIT:	<ul style="list-style-type: none"> <li>• How can we visualize events and outcomes when considering probability events?</li> <li>• How can we count outcomes in probability events?</li> <li>• How can we calculate probabilities, given different types of events</li> <li>• Can we predict how likely it is that an event occurs? How can we use that knowledge?</li> </ul>
---------------------------	--

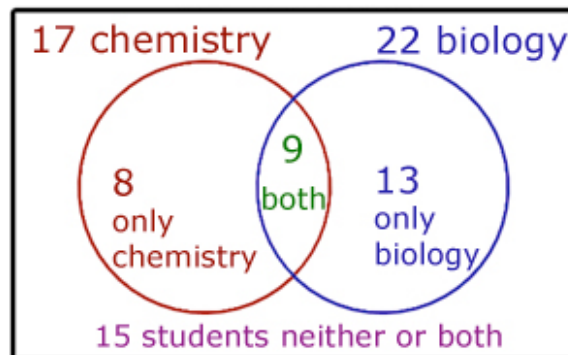
This lesson will be based upon a STUDENT DIRECTED DISCUSSION model ..... in your groups, you should be having DISCUSSIONS about how to think and work through and then present the solutions to the following questions. So, in your group, discuss & prepare solutions to the following questions. Record the key ideas of your discussions/solutions in your notebook. Then, once you have had your discussions, present your solutions on the board. Solutions do NOT necessarily NEED to be correct – they simply form the basis for DISCUSSIONS !!!! If your group has (i) multiple solutions that lead to the same answers OR (ii) same/different solutions that lead to different answers, present them ANYWAY!!

1. You go to the snack bar to buy a bagel and a drink for lunch. You can choose from a plain bagel, a blueberry bagel, or a raisin bagel. The choices for a drink include water or a sports drink. How many different lunches could be made with these choices?

2. Wendy goes to a fun fair. She has one game at Hoopla. She has one game on the Coconut Shy. The probability that she wins at Hoopla is 0.4. The probability that she wins on the Coconut Shy is 0.3.
  - a. Complete the probability tree diagram.
  - b. Work out the probability that Wendy wins once.
  - c. Work out the probability that Wendy wins at Hoopla and also wins on the Coconut shy.



3. Out of a group of 45 students, 17 are taking chemistry and 22 biology. If 9 students do both chemistry and biology.
  - a. How many students are in neither class?
  - b. How many are in either class?
  - c. What is the probability that of a student is taking only the chemistry class?
  - d. What is the probability that a student is taking chemistry given that they also take biology?



4. How many ways can 5 paintings be line up on a wall?

5. A box contains 5 purple marbles, 3 green marbles, and 2 orange marbles. Two consecutive draws are made from the box **without replacement** of the first draw. Find the probability of each event, given the following conditions: (i) the marbles are NOT REPLACED after each draw and then secondly, (ii) the marbles ARE REPLACED after each draw

**(i) Not Replaced**

**(ii) Replaced**

(a)  $P(\text{orange first, green second}) =$

(a)  $P(\text{orange first, green second}) =$

(b)  $P(\text{both marbles are purple}) =$

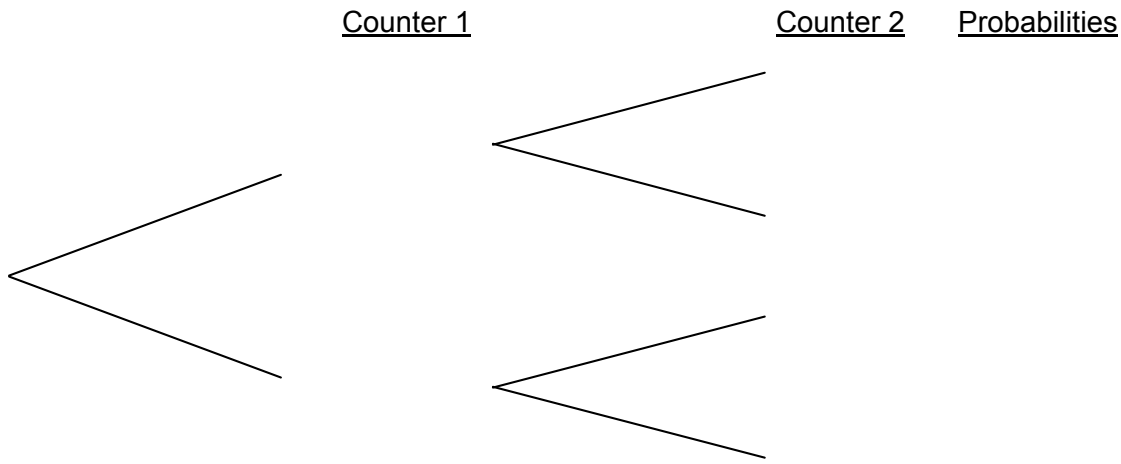
(b)  $P(\text{both marbles are purple}) =$

(c)  $P(\text{the first marble is purple, and the second is ANY color EXCEPT purple}) =$

(c)  $P(\text{the first marble is purple, and the second is ANY color EXCEPT purple}) =$

6. Go on line and find out the difference between compound events that are INDEPENDENT and DEPENDENT. Then decide whether the following events are independent or dependent?
- Roll a die; toss a coin
  - Take a marble out of a bag; take a second marble out of a bag.
  - Choose a person from a group of 50 persons. Choose another person from the same group.
  - Draw a card from the deck and put it back. Draw a card again from the same deck.
  - You have a jar with 24 pieces of chocolate candy and 14 pieces of orange candy. We take one piece of candy at random from the jar, put it back, and then take a second piece of candy at random from the jar.
  - Reem has a blue, red, and green tie. She also has a blue and green shirt. Reem chooses a random tie and shirt for work today.
  - Yeong Kwon plays card games. He picks a card at random. Then without putting the first card back, he picks a second card at random.
  - Kyumin has 14 coins. He takes 3 of them at random, then he puts these back, and then pick 2 more coins at random.
  - Mazzin has \$4,700 in his bank account. He withdraws \$1,200 from his bank account to pay for rent. Brett books a vacation 3-days later that costs \$4,000. He withdraws \$3,500 from his account and goes on a payment pay for the remainder.
  - Hoda has 10 handmade sheets. She takes 6 sheets at random. Then without putting these sheets back, she picks 2 sheets at random.
  - Jeff has 3 children. His first 2 children are boys. His last child is a girl.
7. License plates have 3 letters followed by 4 numbers.
- If the same letter or number can be repeated, how many can be made?
  - If the same letter CANNOT be repeated, how many can be made?

8. A bag contains 7 red counters and 4 blue counters. A disc is taken at random from the bag and not put back in. A second disc is then removed from the bag. Complete the tree diagram below:



Find the probability that:

- |                       |                        |                             |
|-----------------------|------------------------|-----------------------------|
| a. Both discs are red | b. Both discs are blue | c. Both discs are different |
|-----------------------|------------------------|-----------------------------|
9. A club has 25 members, 20 boys and 5 girls. Two members are selected at random to serve as Executive Officers (i.e president and vice president.) What is the probability that both executive officers will be girls.
- |          |           |           |          |
|----------|-----------|-----------|----------|
| a. $1/5$ | b. $1/25$ | c. $1/30$ | d. $1/4$ |
|----------|-----------|-----------|----------|
10. One marble is randomly drawn and then replaced from a jar containing two white marbles and one black marble. A second marble is drawn. What is the probability of drawing a white and then a black?
- |          |          |          |          |
|----------|----------|----------|----------|
| a. $1/3$ | b. $2/9$ | c. $3/8$ | d. $1/6$ |
|----------|----------|----------|----------|
11. One bag contains 2 green marbles and 4 white marbles, and a second bag contains 3 green marbles and 1 white marble. If Trent randomly draws one marble from each bag, what is the probability that they are both green?
12. On a certain day the chance of rain is 80% in San Francisco and 30% in Sydney. Assume that the chance of rain in the two cities is independent. What is the probability that it will NOT rain in either city? (It will not rain in BOTH cities.)

13. Take a card from a normal deck, without looking at it.

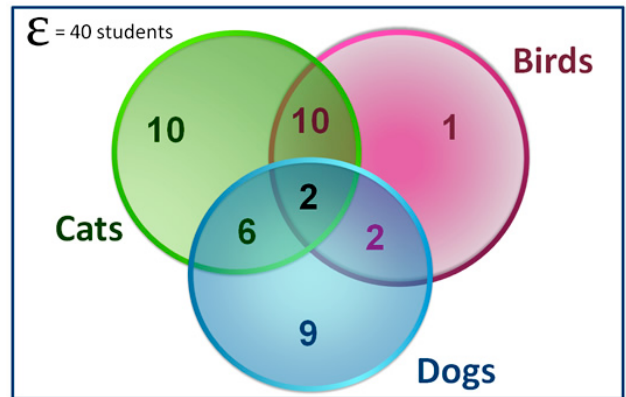
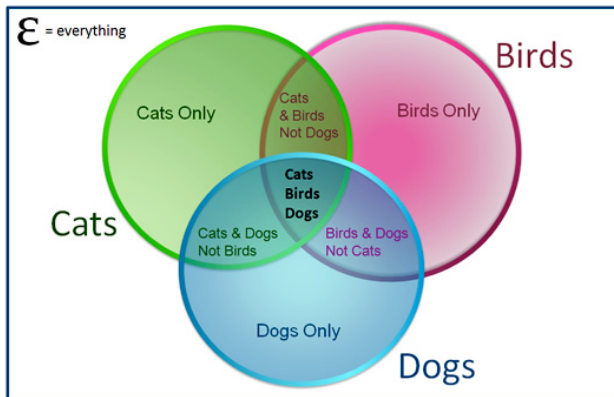
- a. What is the probability you drew a spade? \_\_\_\_\_
- b. Now assume that you peeked just a little and know that the card is black. What is the probability you drew a spade? \_\_\_\_\_
- c. Assume you didn't peek but your friend did and tells you that the card is not a heart. What is the probability you drew a spade? \_\_\_\_\_
- d. The proper notation for the last question is  $P(\text{spade} \mid \text{not a heart})$ . This means "the probability of a spade given that the card is not a heart." The symbol for a *known* or *given* condition is a \_\_\_\_\_ and the given fact determines the \_\_\_\_\_ of the probability.

14. A Class of 40 students completed a survey on what pets they like. The choices were: Cats, Dogs, and Birds. Everyone liked at least one pet.

10 students liked Cats and Birds but not dogs  
 2 students liked Dogs and Birds but not Cats  
 10 students liked Cats only  
 1 student liked Birds only

6 students liked Cats and Dogs but not birds  
 2 students liked all three pets  
 9 students liked Dogs only

Represent these results using a three circle Venn Diagram.



How probable is it that a randomly selected student:

- a. has a bird;
- b. has a bird only;
- c. has a bird or a dog
- d. has a bird and a dog
- e. has a bird given that they have a dog
- f. has a dog given that they have a bird
- g. has a dog, but not a cat
- h. has either a dog or a cat, but not a bird
- i. has neither a dog nor a cat



**Higher Level Questions for More Complex Concepts in Probability.** Determine the probability of the event described in each exercise. Unless stated otherwise, assume all items of chance (dice, coins, cards, spinners, etc.) are fair.

### **Problem #1 – Expected Value**

#### **1.1 Some Simple Games**

Lets say you play a game where you roll a fair die (what does this mean?) and get paid according to your roll:

Roll	Payout
6	\$ 4
5	\$ 2
4	\$ 1
3	\$ 0
2	\$ 0
1	\$ 0

You have to pay \$1 to play this game. Is it worth it? What do you expect to happen in the long run?

### **Problem #2 – False Positives**

Five percent of my students suffer from a terrible malady called Lazybrain(LB). A blood test detects LB accurately 90% of the time. Yusuke is told that his blood test is positive for LB. Yusuke hopes that this is a “false positive” and he actually doesn’t have Lazybrain.

- Draw the tree with all the probabilities. Indicate which branches are the *false positive*, *false negative*, *correct positive*, and *correct negative*.
- Find the probability that Yusuke is OK even though his blood test was positive.

### **Problem #3 – Working with Formulas**

Suppose you throw a pair of fair 6-sided dice. One is white and the other is black. Let  $T$  = total showing on both dice, and  $B$  = number showing on the black die.

a) Find  $P(T = 5 | B = 2)$

b) Find  $P(B = 2 | T = 5)$