

**GOAL**

Connect the number of solutions to a linear system with its equations and graphs.

**YOU WILL NEED**

- graphing calculator, or grid paper and ruler

**EXPLORE the Math**

Three different linear systems are given below.

A	B	C
$2x + 3y = -4$	$2y = 6 - 3x$	$x - y = 5$
$-4x - 3y = -1$	$6x - 5 = -4y$	$3x = 15 + 3y$

**?** How many solutions can a linear system have, and how can you predict the number of solutions without solving the system?

- A. Solve each system of linear equations algebraically. Record the number of solutions you determine.

	A	B	C
Linear System	$2x + 3y = -4$ $-4x - 3y = -1$	$3x + 2y = 6$ $6x + 4y = 5$	$x - y = 5$ $3x - 3y = 15$
Number of Solutions			

- B. Examine your algebraic solution for system A. How do you think the lines that represent the equations in this system intersect? Explain. Graph the system to check your conjecture.
- C. Repeat part B for each of the other two systems.
- D. For each system, explain how the graphical solution is related to the algebraic solution, and vice versa.
- E. Examine the equations in each system. Are there clues that tell you how the lines will intersect? Explain.
- F. Can a linear system of two equations have exactly two solutions? Can it have exactly three solutions? Explain.
- G. Discuss the different cases you have identified and how each case relates to the equations and their corresponding graphs.

## Reflecting

- H. Both equations in a linear system that has no solution are written in the form  $Ax + By = C$ . Describe the relationship between the coefficients and the constants. What does this tell you about the graphs of both lines?
- I. Both equations in a linear system that has an infinite number of solutions are written in the form  $Ax + By = C$ . Describe the relationship between the coefficients and the constants. What does this tell you about the graphs of both lines?
- J. How can you tell, by looking at the equations, that a linear system has exactly one solution?

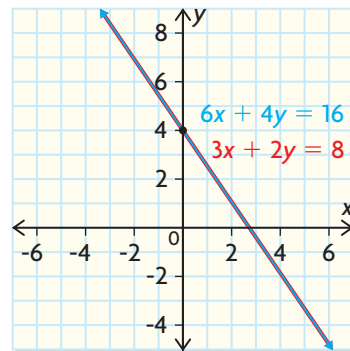
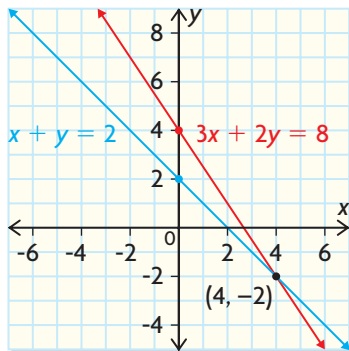
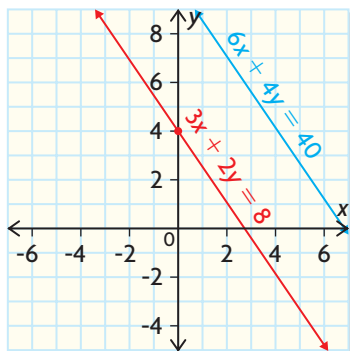
## In Summary

### Key Idea

- A linear system can have no solution, one solution, or an infinite number of solutions.

### Need to Know

- When a linear system has no solution, the graphs of both lines are parallel and never intersect. For example, the system  $3x + 2y = 8$  and  $6x + 4y = 40$  does not have a solution. The coefficients in the equations are multiplied by the same amount, but the constants are not.
- When a linear system has one solution, the graphs of the two lines intersect at a single point. For example, the system  $3x + 2y = 8$  and  $x + y = 2$  has one solution. The coefficients and constants in the equations are not multiplied by the same amount.
- When a linear system has an infinite number of solutions, the graphs of both equations are identical and intersect at every point. For example, the system  $3x + 2y = 8$  and  $6x + 4y = 16$  has an infinite number of solutions. The coefficients and constants in the equations are multiplied by the same amount.



## FURTHER Your Understanding

- Graph a linear system of equations that has each number of solutions.
  - none
  - one
  - infinitely many
- Use the equation  $3x + 4y = 2$ .
  - Write another equation that will create a linear system with each number of solutions.
    - none
    - one
    - infinitely many
  - Verify your answers for part a) algebraically and graphically.
- Predict the number of solutions for each linear system. Then test your predictions by solving each system algebraically and verify with graphing technology.
  - $y = 3x - 5$   
 $y = 4x + 6$
  - $y = 4x - 3$   
 $y = 4x - 7$
  - $y = 5x - \frac{3}{2}$   
 $y = 5x - 1.5$
  - $x + 2y = 10$   
 $y = 8 - 0.5x$
  - $2x + 3y = 10$   
 $10x + 15y = 50$
  - $3x - 5y - 2 = 0$   
 $4x + 5y + 2 = 0$
  - $y = 1.25x - 0.375$   
 $5y = 4x$
  - $2x - 5 = 4y$   
 $0.01x - 0.02y = 0.25$
- Create a system of linear equations that has each number of solutions. Then verify the number of solutions algebraically and graphically.
  - none
  - one
  - infinitely many
- Both equations in a linear system are written in the form  $Ax + By = C$ . Explain how you could predict the number of solutions using the coefficients and constants of the two equations.
- An air traffic controller is plotting the course of two jets scheduled to land in 15 min. One aircraft is following a path defined by the equation  $3x - 5y = 20$  and the other by the equation  $18x = 30y + 72$ . Should the controller alter the paths of either aircraft? Justify your decision.

